

SUMMER PACK MATH WORKSHEETS

Name: _____ Class: _____ Date: _____

Addition in three digit with regrouping page - 1

a. $\begin{array}{r} \square\square\square \\ 546 \\ +436 \\ \hline \end{array}$	b. $\begin{array}{r} \square\square\square \\ 438 \\ +522 \\ \hline \end{array}$	c. $\begin{array}{r} \square\square\square \\ 312 \\ +349 \\ \hline \end{array}$
d. $\begin{array}{r} \square\square\square \\ 239 \\ +436 \\ \hline \end{array}$	e. $\begin{array}{r} \square\square\square \\ 523 \\ +267 \\ \hline \end{array}$	f. $\begin{array}{r} \square\square\square \\ 724 \\ +137 \\ \hline \end{array}$
g. $\begin{array}{r} \square\square\square \\ 262 \\ +239 \\ \hline \end{array}$	h. $\begin{array}{r} \square\square\square \\ 447 \\ +327 \\ \hline \end{array}$	i. $\begin{array}{r} \square\square\square \\ 155 \\ +238 \\ \hline \end{array}$

SUMMER PACK MATH WORKSHEETS

Name: _____ Class: _____ Date: _____

Addition in three digit with regrouping page - 2

1) $\begin{array}{r} 226 \\ +474 \\ \hline \end{array}$	2) $\begin{array}{r} 553 \\ + 97 \\ \hline \end{array}$	3) $\begin{array}{r} 105 \\ +399 \\ \hline \end{array}$	4) $\begin{array}{r} 565 \\ +244 \\ \hline \end{array}$
5) $\begin{array}{r} 452 \\ +478 \\ \hline \end{array}$	6) $\begin{array}{r} 598 \\ +327 \\ \hline \end{array}$	7) $\begin{array}{r} 582 \\ +149 \\ \hline \end{array}$	8) $\begin{array}{r} 127 \\ +404 \\ \hline \end{array}$
9) $\begin{array}{r} 169 \\ +666 \\ \hline \end{array}$	10) $\begin{array}{r} 313 \\ +191 \\ \hline \end{array}$	11) $\begin{array}{r} 427 \\ +565 \\ \hline \end{array}$	12) $\begin{array}{r} 279 \\ +619 \\ \hline \end{array}$

SUMMER PACK MATH WORKSHEETS

Name: _____ Class: _____ Date: _____

Rewrite the numbers for three digit addition page - 3

<p>a. $356 + 190$</p> $\begin{array}{r} \square \square \square \\ + \square \square \square \\ \hline \end{array}$	<p>b. $199 + 121$</p> $\begin{array}{r} \square \square \square \\ + \square \square \square \\ \hline \end{array}$	<p>c. $379 + 494$</p> $\begin{array}{r} \square \square \square \\ + \square \square \square \\ \hline \end{array}$	<p>d. $270 + 420$</p> $\begin{array}{r} \square \square \square \\ + \square \square \square \\ \hline \end{array}$
<p>e. $409 + 325$</p> $\begin{array}{r} \square \square \square \\ + \square \square \square \\ \hline \end{array}$	<p>f. $253 + 115$</p> $\begin{array}{r} \square \square \square \\ + \square \square \square \\ \hline \end{array}$	<p>g. $120 + 262$</p> $\begin{array}{r} \square \square \square \\ + \square \square \square \\ \hline \end{array}$	<p>h. $199 + 181$</p> $\begin{array}{r} \square \square \square \\ + \square \square \square \\ \hline \end{array}$

SUMMER PACK MATH WORKSHEETS

Name: _____ Class: _____ Date: _____

Subtraction in three digit with regrouping page - 4

<p>A</p> $\begin{array}{r} \\ 480 \\ - 235 \\ \hline \end{array}$	<p>B</p> $\begin{array}{r} \\ 677 \\ - 94 \\ \hline \end{array}$	<p>C</p> $\begin{array}{r} \\ 350 \\ - 128 \\ \hline \end{array}$
<p>D</p> $\begin{array}{r} \\ 930 \\ - 55 \\ \hline \end{array}$	<p>E</p> $\begin{array}{r} \\ 222 \\ - 139 \\ \hline \end{array}$	<p>F</p> $\begin{array}{r} \\ 723 \\ - 260 \\ \hline \end{array}$
<p>G</p> $\begin{array}{r} \\ 808 \\ - 145 \\ \hline \end{array}$	<p>H</p> $\begin{array}{r} \\ 167 \\ - 90 \\ \hline \end{array}$	<p>I</p> $\begin{array}{r} \\ 521 \\ - 218 \\ \hline \end{array}$

SUMMER PACK MATH WORKSHEETS

Name: _____ Class: _____ Date: _____

Subtraction in three digit with regrouping page - 5

$\begin{array}{r} \square\square\square \\ 745 \\ - 437 \\ \hline \end{array}$	$\begin{array}{r} \square\square\square \\ 275 \\ - 149 \\ \hline \end{array}$	$\begin{array}{r} \square\square\square \\ 542 \\ - 407 \\ \hline \end{array}$	$\begin{array}{r} \square\square\square \\ 380 \\ - 112 \\ \hline \end{array}$	$\begin{array}{r} \square\square\square \\ 208 \\ - 105 \\ \hline \end{array}$
$\begin{array}{r} \square\square\square \\ 536 \\ - 264 \\ \hline \end{array}$	$\begin{array}{r} \square\square\square \\ 681 \\ - 552 \\ \hline \end{array}$	$\begin{array}{r} \square\square\square \\ 288 \\ - 179 \\ \hline \end{array}$	$\begin{array}{r} \square\square\square \\ 433 \\ - 319 \\ \hline \end{array}$	$\begin{array}{r} \square\square\square \\ 695 \\ - 327 \\ \hline \end{array}$
$\begin{array}{r} \square\square\square \\ 221 \\ - 106 \\ \hline \end{array}$	$\begin{array}{r} \square\square\square \\ 212 \\ - 117 \\ \hline \end{array}$	$\begin{array}{r} \square\square\square \\ 612 \\ - 127 \\ \hline \end{array}$	$\begin{array}{r} \square\square\square \\ 250 \\ - 114 \\ \hline \end{array}$	$\begin{array}{r} \square\square\square \\ 365 \\ - 205 \\ \hline \end{array}$

SUMMER PACK MATH WORKSHEETS

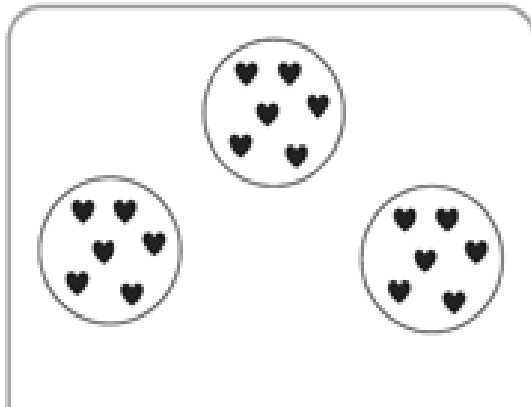
Name: _____

Class: _____


Date: _____

Count equal groups

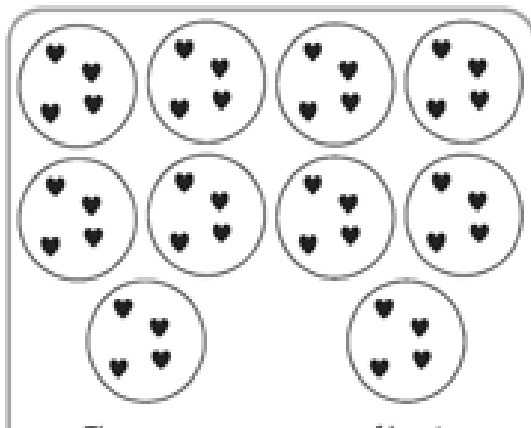
Fill in the blank to describe the model.




There are _____ groups of hearts.
There are _____ hearts in each group.



There are _____ groups of hearts.
There are _____ hearts in each group.



There are _____ groups of hearts.
There are _____ hearts in each group.




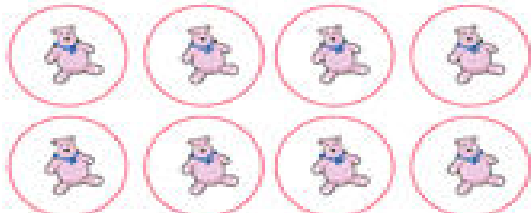






There is _____ group of hearts.
There are _____ hearts in the group.

SUMMER PACK MATH WORKSHEETS

Name: _____ Class: _____ Date: _____

Count equal groups













 <p><u> 2 </u> groups of <u> 7 </u></p>	 <p>_____ groups of _____</p>
 <p>_____ groups of _____</p>	 <p>_____ groups of _____</p>
 <p>_____ groups of _____</p>	 <p>_____ groups of _____</p>
 <p>_____ group of _____</p>	 <p>_____ groups of _____</p>

SUMMER PACK MATH WORKSHEETS













Name _____

Skip Counting











Count by 2.

					
2	4				
					
14					24

Count by 5.

					
5	10				
					
35					60

Count by 10.

					
10	20				
					
			100		

©Crazy About Learning

SUMMER PACK MATH WORKSHEETS

Name: _____ Class: _____ Date: _____

Extend the pattern by skip counting in 100's

a. 100, 200, 300, 400, _____, _____, _____, _____, _____

b. 240, 340, 440, 540, _____, _____, _____

c. 132, 232, 323, _____, _____, _____, _____, _____

d. 437, 537, 647, _____, _____, _____

e. 560, 660, _____, _____

Work out what the pattern is and complete the next 3 numbers

A Set (fairly easy)

1. 12, 14, 16, _____, _____, _____

2. 100, 200, 300, _____, _____, _____

3. 30, 40, 50, _____, _____, _____

B Set (getting harder)

1. 352, 354, 356, _____, _____, _____

2. 905, 910, 915, _____, _____, _____

3. 750, 770, 790, _____, _____, _____

SUMMER PACK MATH WORKSHEETS

Name _____

Count by fives.

a. 340, 345, 350, _____, _____, _____, _____

b. 815, 820, 825, _____, _____, _____, _____

c. 585, 590, 595, _____, _____, _____, _____

d. 760, 765, 770, _____, _____, _____, _____

Count by tens.

e. 920, 930, 940, _____, _____, _____, _____

f. 280, 290, 300, _____, _____, _____, _____

g. 660, 670, 680, _____, _____, _____, _____

Count by hundreds.

e. 223, 323, 423, _____, _____, _____, _____

f. 376, 476, 576, _____, _____, _____, _____